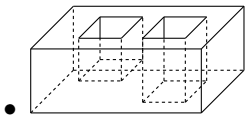
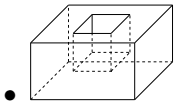
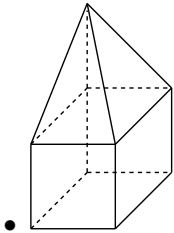
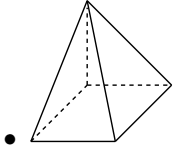


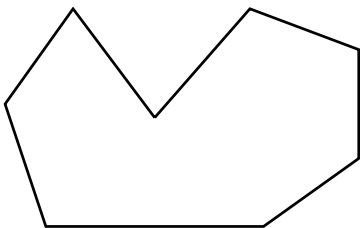
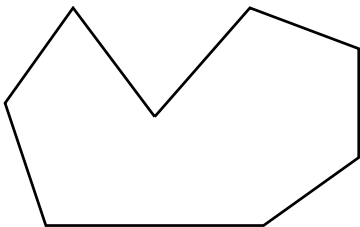
# Cvičení 1

1. Jsou křivky tělesa? A co plochy?

2. Jsou následující tělesa mnohostěny?



3. Triangulujte:



4. Pro čtyřstěn napište, jak by vypadala strukturovaná plošková reprezentace.

